

Name _____




Greater than
or Less than




Write the number less than and more than the number shown

10




7

14




2

7




10

19




25

12



15

9



4