



Name \_\_\_\_\_

 Greater than  
or Less than   
Count and compare



How many  ? 6




How many  ? 3

Which of these are more ?



How many  ? 5



How many  ? 2

Which of these are more ?

