





















Name _____



Greater than
or Less than



Compare the numbers in the apple by using <, =, or > sign

 12	<input type="radio"/>	 12
 20	<input type="radio"/>	 14
 7	<input type="radio"/>	 15
 25	<input type="radio"/>	 26
 22	<input type="radio"/>	 23
 10	<input type="radio"/>	 18
 19	<input type="radio"/>	 29
 17	<input type="radio"/>	 11
 27	<input type="radio"/>	 9
 30	<input type="radio"/>	 30